

---


Secondary Math

**Week Two**

March 30<sup>th</sup> – April 3<sup>rd</sup>

---

Paige has 10 glow sticks.




Drew has 4 glow sticks.

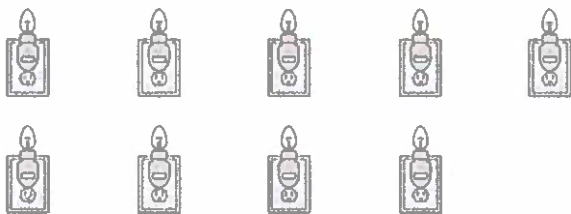


How many altogether?

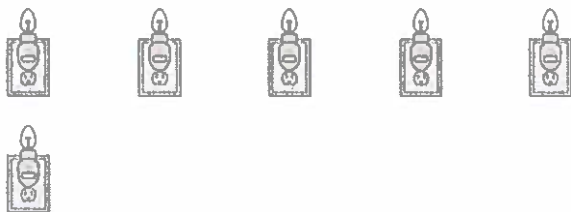
+



Paige turns on 9 night lights.



Drew turns on 6 night lights.



How many altogether?

+



Paige counts 11 flashlights.



Drew counts 5 flashlights.



How many altogether?



+



Paige sees 10 lanterns.



Drew sees 8 lanterns.



How many altogether?



+



Paige counts 8 night lights.

Drew counts 7 night lights.

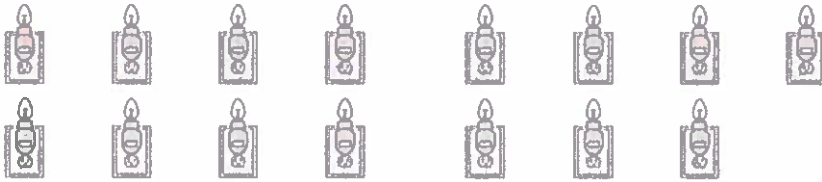
 How many altogether?



+




=



Paige sees 10 flashlights.

Drew sees 10 flashlights.


 How many altogether?



+




=



Paige sees 3 night lights.

Drew sees 1 night light.

 How many altogether?


+

=



Paige turns on 4 flashlights.

Drew turns on 3 flashlights.

 How many altogether?

+

=

